


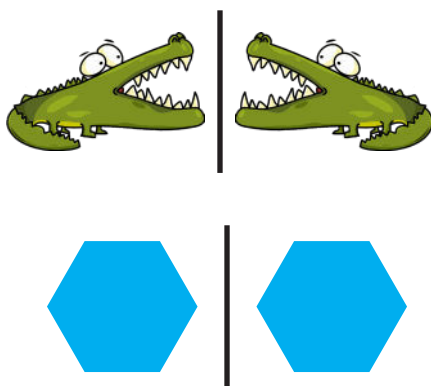
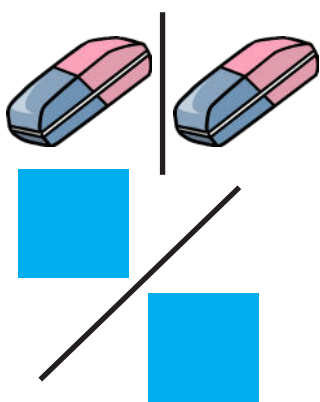
# SYMÉTRIE AXIALE





Voici les objectifs des exercices :

- ✓ Identifier des figures symétriques.
- ✓ Trouver des axes de symétrie.
- ✓ Tracer le symétrique d'une figure.

## 1 Entoure les figures symétriques.



## 2 Trace les axes de symétrie de ces figures.



## 3 Trace les symétriques de ces figures.

