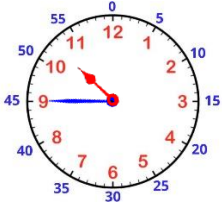


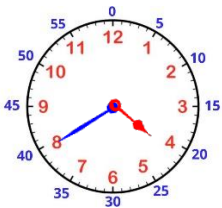
# Se repérer dans le temps

*Lire l'heure : moins le quart, moins cinq...*

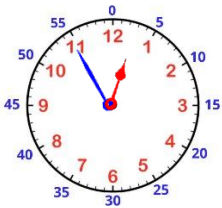
## 1 Relie les horloges aux bonnes heures.



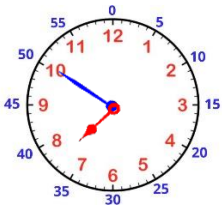
• 5h moins vingt



• 8h moins dix

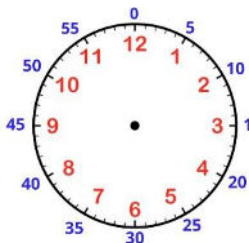


• 11h moins le quart

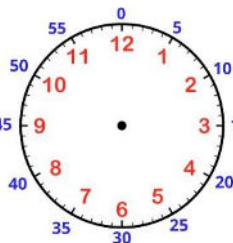


• 1h moins cinq

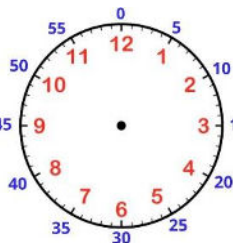
## 2 Dessine les aiguilles en fonction de l'heure indiquée.



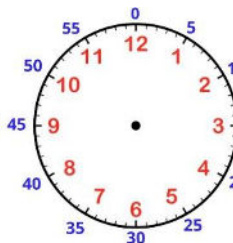
moins le quart



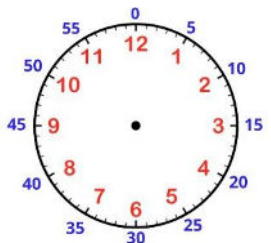
moins 5



moins 20



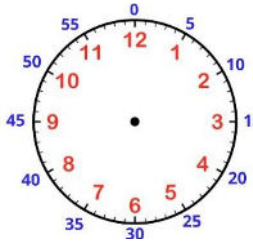
moins 25



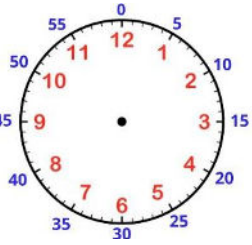
moins 10

Prénom : \_\_\_\_\_

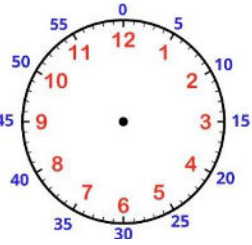
Date : \_\_\_\_\_



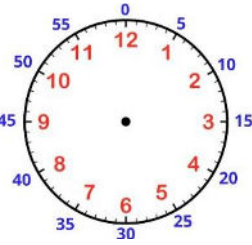
3h et quart



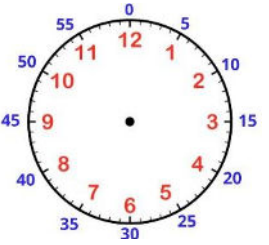
10h et demie



4h moins 10



8h moins 20



6h et demie

3

Quelle heure est-il ?

