


Prénom : _____

Date : _____


Relie les horloges avec les heures




8 : 00




2 : 00



1 : 00



5 : 00



3 : 00