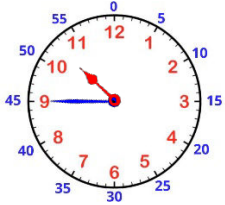


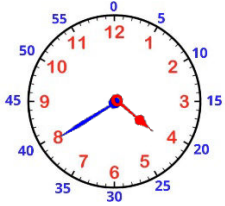
Prénom :

Date :


1 Relie les horloges aux bonnes heures.



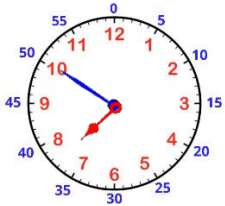
• 5h moins vingt



• 18h moins dix

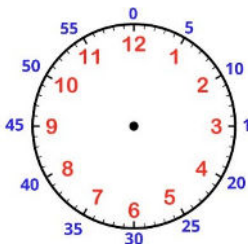


• 11h moins le quart

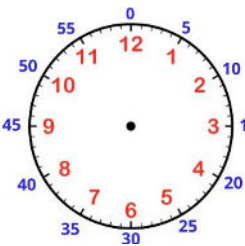


• 1h moins cinq

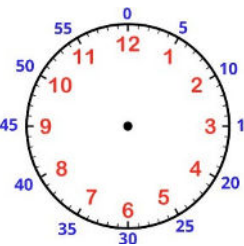
2 Dessine les aiguilles en fonction de l'heure indiquée.



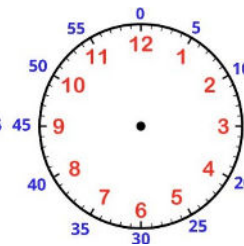
moins le quart



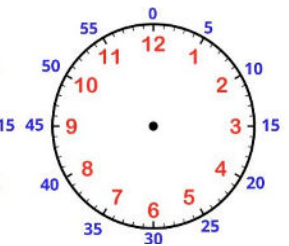
moins 5



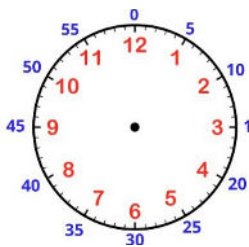
moins 20



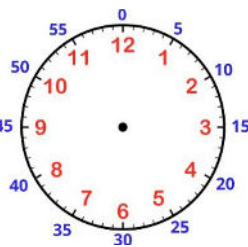
moins 25



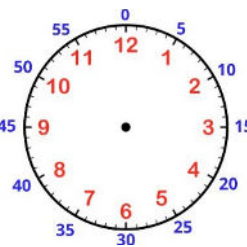
moins 10



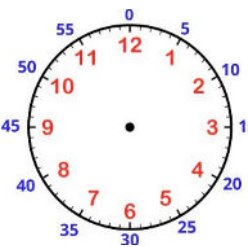
3h et quart



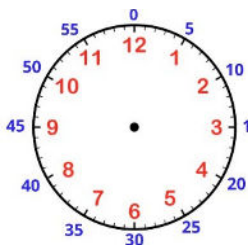
10h et demie



4h moins 10



8h moins 20



6h et demie

3

Quelle heure est-il ?

