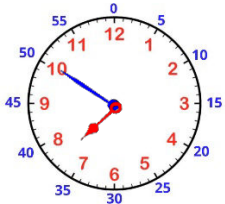
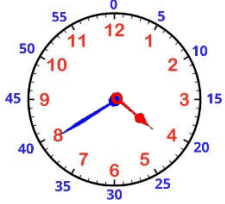
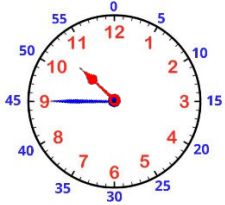


Prénom :

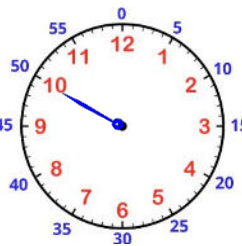
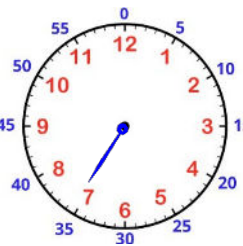
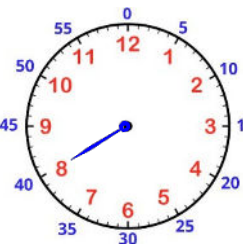
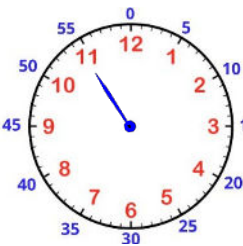
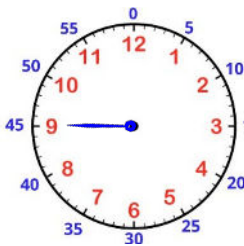
Date :

1 Relie les horloges aux bonnes heures.



- 5h moins vingt
- 18h moins dix
- 11h moins le quart
- 1h moins cinq

2 Dessine les aiguilles en fonction de l'heure indiquée.



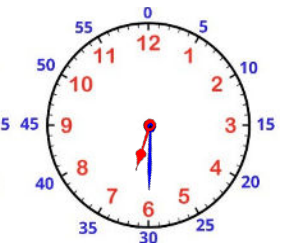
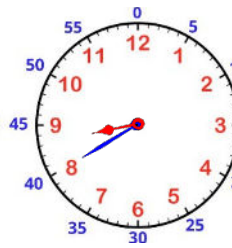
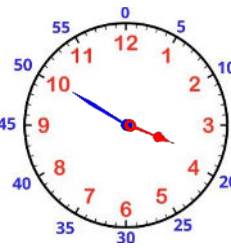
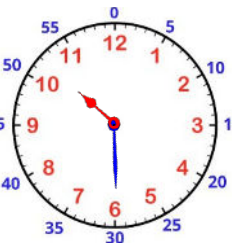
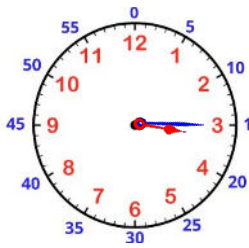
moins le quart

moins 5

moins 20

moins 25

moins 10



3h et quart

10h et demie

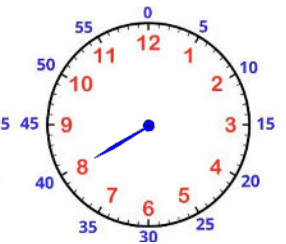
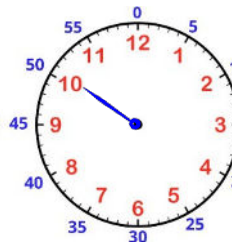
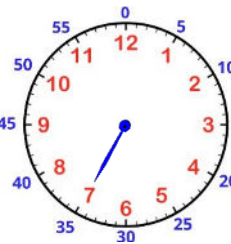
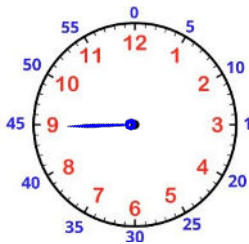
4h moins 10

8h moins 20

6h et demie

3

Quelle heure est-il ?



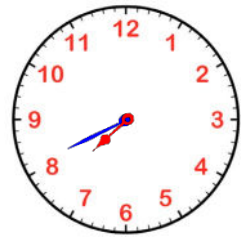
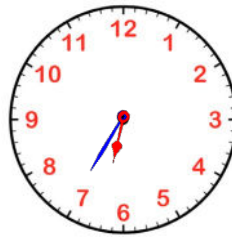
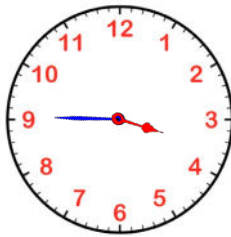
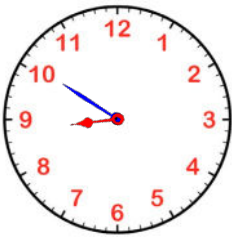
moins le quart

moins 5

moins 25

moins 10

moins 20



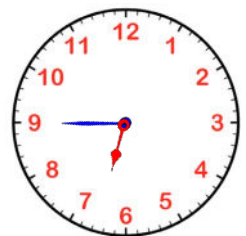
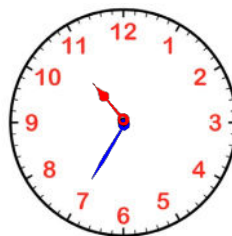
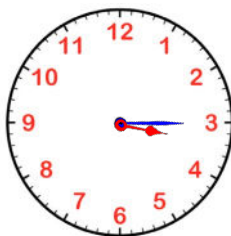
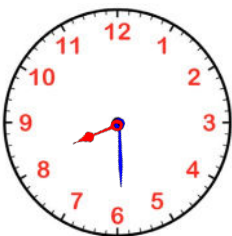
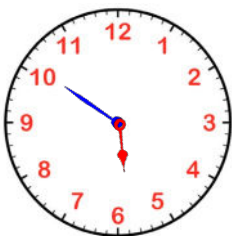
6h moins 5

9h moins 10

4h moins le
quart

7h moins 25

8h moins 20



6h moins 10

8h et demie

3h et quart

11h moins 25

7h moins le
quart