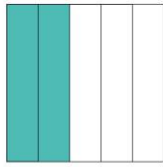
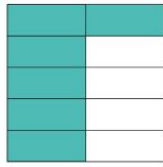



Compare les fractions

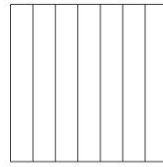
Comparing Fractions



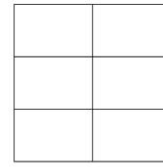

$\frac{2}{5}$



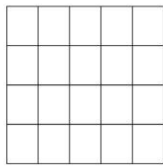

$\frac{6}{10}$



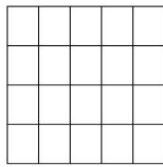
$\frac{3}{7}$



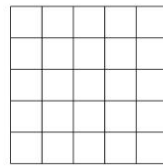
$\frac{2}{6}$



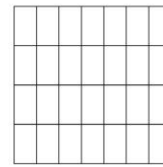
$\frac{8}{20}$



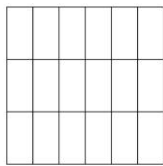
$\frac{12}{20}$



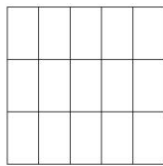
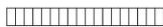
$\frac{15}{25}$



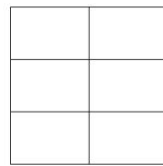
$\frac{12}{28}$



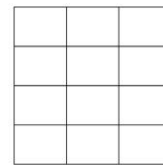

$\frac{14}{18}$



$\frac{14}{15}$



$\frac{3}{6}$



$\frac{6}{12}$

