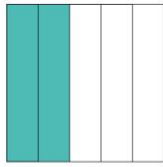
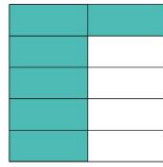


Compare les fractions

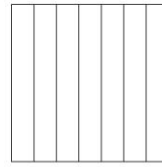

Comparing Fractions



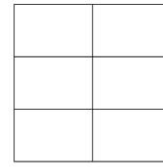
$$\frac{2}{5}$$



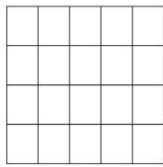


$$\frac{6}{10}$$



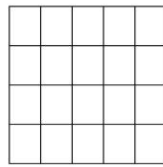
$$\frac{3}{7}$$



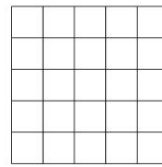
$$\frac{2}{6}$$



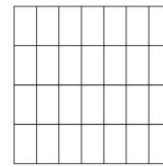
$$\frac{8}{20}$$



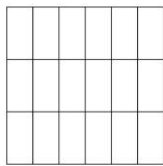
$$\frac{12}{20}$$



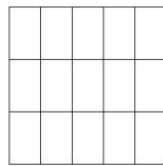
$$\frac{15}{25}$$



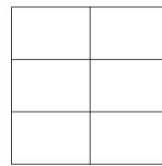
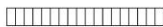
$$\frac{12}{28}$$



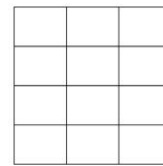
$$\frac{14}{18}$$



$$\frac{14}{15}$$



$$\frac{3}{6}$$



$$\frac{6}{12}$$

