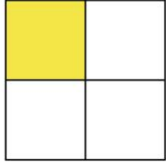


Prénom : _____

Date : _____

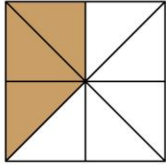
fractions



•

•


$$\frac{1}{4}$$



•

•

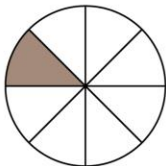
$$\frac{2}{6}$$



•

•

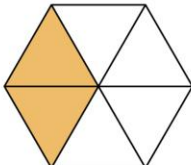
$$\frac{1}{4}$$



•

•

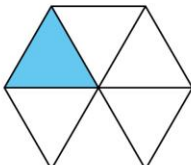
$$\frac{1}{8}$$



•

•

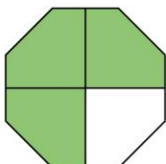
$$\frac{2}{4}$$



•

•


$$\frac{1}{6}$$



•

•

$$\frac{3}{8}$$



•

•

$$\frac{1}{6}$$