

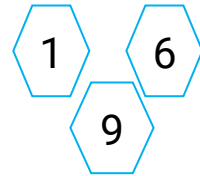
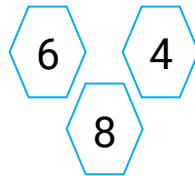
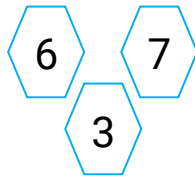
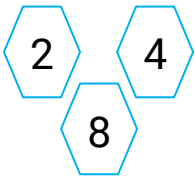
Prénom :

Date :

1 Complète la maison du 10.



2 Ecris les opérations les plus simples.



..... + + =

..... + + =

..... + + =

..... + + =

3 Calcule en passant par 10.

$9 + 7 =$

$\square + \square + \square = \square$

$7 + 5 =$

$\square + \square + \square = \square$

$8 + 6 =$

$\square + \square + \square = \square$

$8 + 5 =$

$\square + \square + \square = \square$

$9 + 5 =$

$\square + \square + \square = \square$

$9 + 6 =$

$\square + \square + \square = \square$