

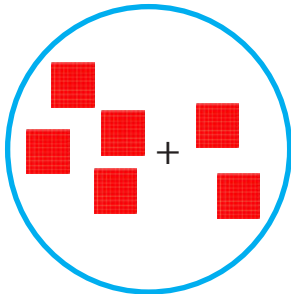
ADDITIONNER ET SOUSTRAIRE DES CENTAINES ENTIÈRES

Voici les objectifs des exercices :

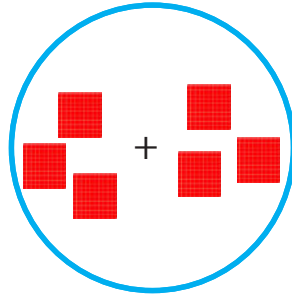
- ✓ Additionner des centaines entières.
- ✓ Soustraire des centaines entières.



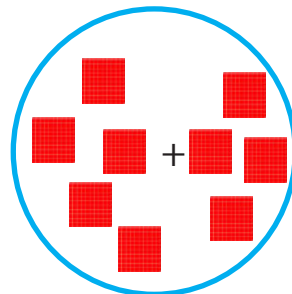
1 Combien y a-t-il de centaines dans chaque cercle ?



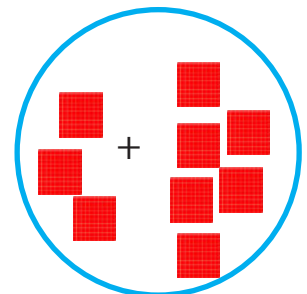
___ centaines



___ centaines



___ centaines



___ centaines

2 Calcule les dizaines.

$5c + 3c = \underline{\quad}c$

$6c + 3c = \underline{\quad}c$

$3c + 5c = \underline{\quad}c$

$2c + 6c = \underline{\quad}c$

3 Calcule.

$200 + 300 = \underline{\quad}$

$800 - 300 = \underline{\quad}$

$500 + 200 = \underline{\quad}$

$500 - 400 = \underline{\quad}$

$100 + 400 = \underline{\quad}$

$400 - 300 = \underline{\quad}$

$500 + 300 = \underline{\quad}$

$900 - 500 = \underline{\quad}$

$300 + 200 = \underline{\quad}$

$700 - 200 = \underline{\quad}$

$100 + 600 = \underline{\quad}$

$700 - 500 = \underline{\quad}$

$500 + 400 = \underline{\quad}$

$600 - 300 = \underline{\quad}$

$300 + 400 = \underline{\quad}$

$800 - 200 = \underline{\quad}$

$200 + 700 = \underline{\quad}$

$900 - 800 = \underline{\quad}$