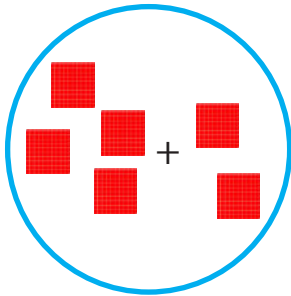


ADDITIONNER ET SOUSTRAIRE DES CENTAINES ENTIÈRES

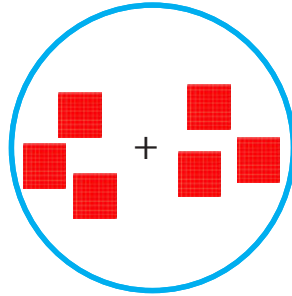
Voici les objectifs des exercices :

- ✓ Additionner des centaines entières.
- ✓ Soustraire des centaines entières.

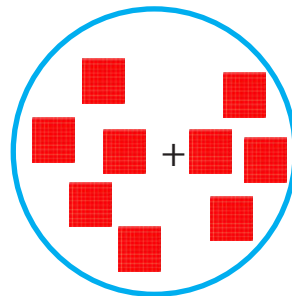
1 Combien y a-t-il de centaines dans chaque cercle ?



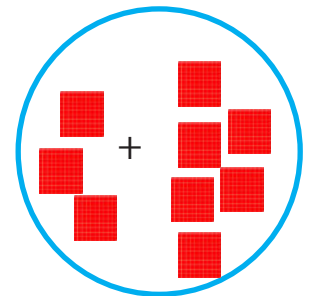
6 centaines



6 centaines



9 centaines



9 centaines

2 Calcule les dizaines.

$$5c + 3c = 8c$$

$$6c + 3c = 9c$$

$$3c + 5c = 8c$$

$$2c + 6c = 8c$$

3 Calcule.

$$200 + 300 = 500$$

$$800 - 300 = 500$$

$$500 + 200 = 700$$

$$500 - 400 = 100$$

$$100 + 400 = 500$$

$$400 - 300 = 100$$

$$500 + 300 = 800$$

$$900 - 500 = 400$$

$$300 + 200 = 500$$

$$700 - 200 = 500$$

$$100 + 600 = 700$$

$$700 - 500 = 200$$

$$500 + 400 = 900$$

$$600 - 300 = 300$$

$$300 + 400 = 700$$

$$800 - 200 = 600$$

$$200 + 700 = 900$$

$$900 - 800 = 100$$