



- ✓ Identifier les chiffres jusqu'à 10.
- ✓ Dénombrer des quantités jusqu'à 10.

Prénom :









Lundi	Mardi	Mercredi	Jeudi	Vendredi
-------	-------	----------	-------	----------

1 Ecris dans la case combien il y a d'animaux dans chaque ligne.









2

Ecris le nombre de points dessinés.



3

Dessine le nombre de points indiqués.



4

Ecris les nombres manquants.

1	2			5	7		10
		3				8	

5

Relie.

10	9	3	8	4	7	6

6

Trouve les nombres avant et après.

	7	
--	---	--

	1	
--	---	--

		3
--	--	---

	6	
--	---	--

	9	
--	---	--

		9
--	--	---

	4	
--	---	--

	8	
--	---	--

8		
---	--	--

	2	
--	---	--

	6	
--	---	--

7		
---	--	--

7

Entoure le nombre le plus grand.

8

9

7

9

9

3

4

5

4

5

8

7

7

2

0


2

6

8

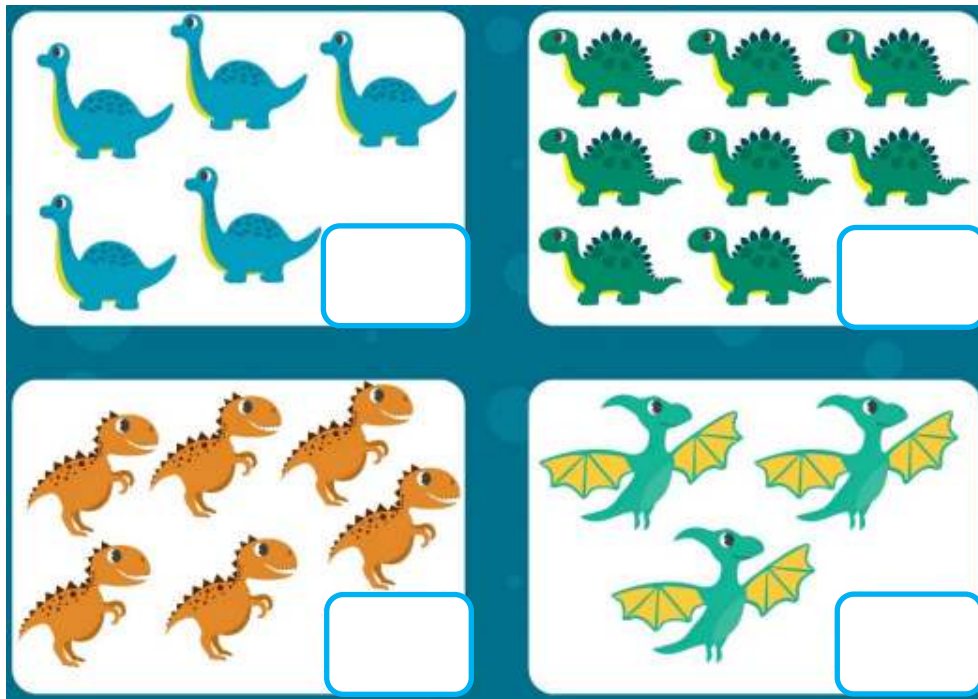
8

Combien d'éléphants ?



9

Combien de dinosaures ?



10

Combien d'insectes ?

